


Name _____

Day 1

3rd grade, 4th grade


These are pages to practice your drawing. Look at the pages, read the directions and finish the drawing with pencils, crayons and/or markers.



LESSON 1

Warm-up

All right, we've covered the basics: why drawing is important, how this book will teach you to draw, what to watch for, and the pre-test. Now, all we need to do is to get that pencil blasting across your paper in 3-D! Fuel up your "pencil power" by shaking out your drawing hand vigorously and wiggling your fingers for 15-30 seconds. It may look silly, but it's an important loosening-up exercise before each lesson. I call it DRAWERCIZE. (Thanks Judi Sheppard-Misset). Just as athletes stretch their muscles before working out, we artists warm up our drawing hands! Ready...Set...Go!

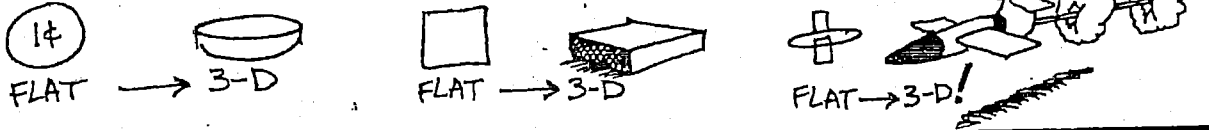


Key Drawing Word: Foreshortening

When you draw in 3-D, you create a visual illusion. By distorting images you make them appear three-dimensional even though your drawing surface is flat.

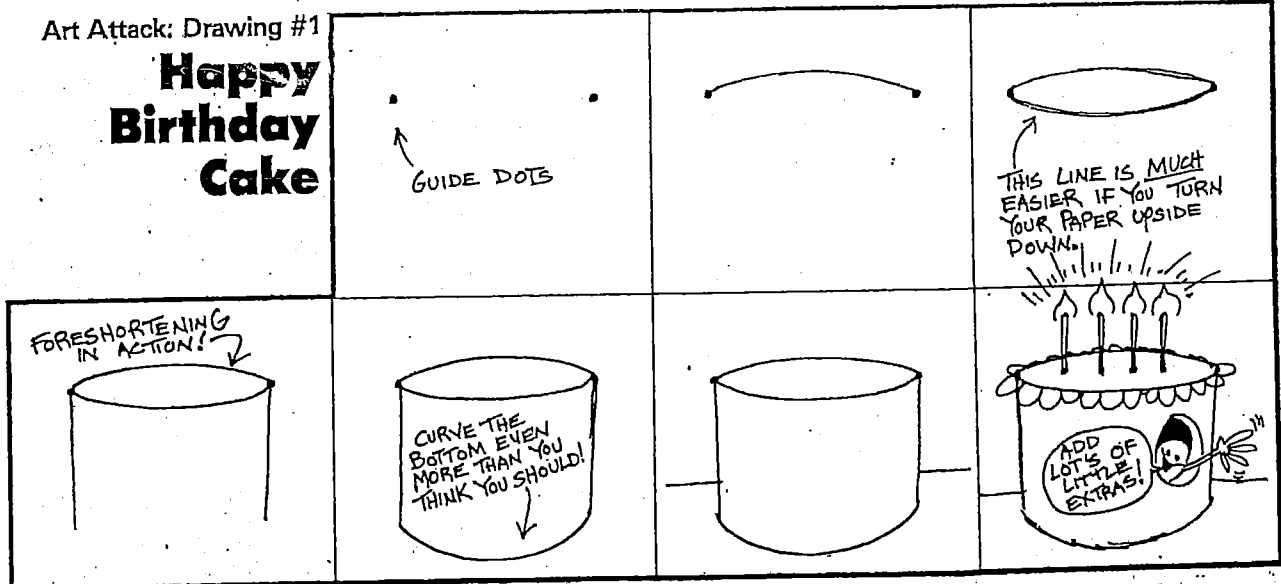
Foreshortening makes one part of an object appear closer than another. To understand this, take a coin between your thumb and index finger. Hold it directly toward you so it forms a circle. Now, tilt the coin away from you until it looks like this:

Voila! A foreshortened circle! **Foreshortening** makes any drawing surface appear three-dimensional!



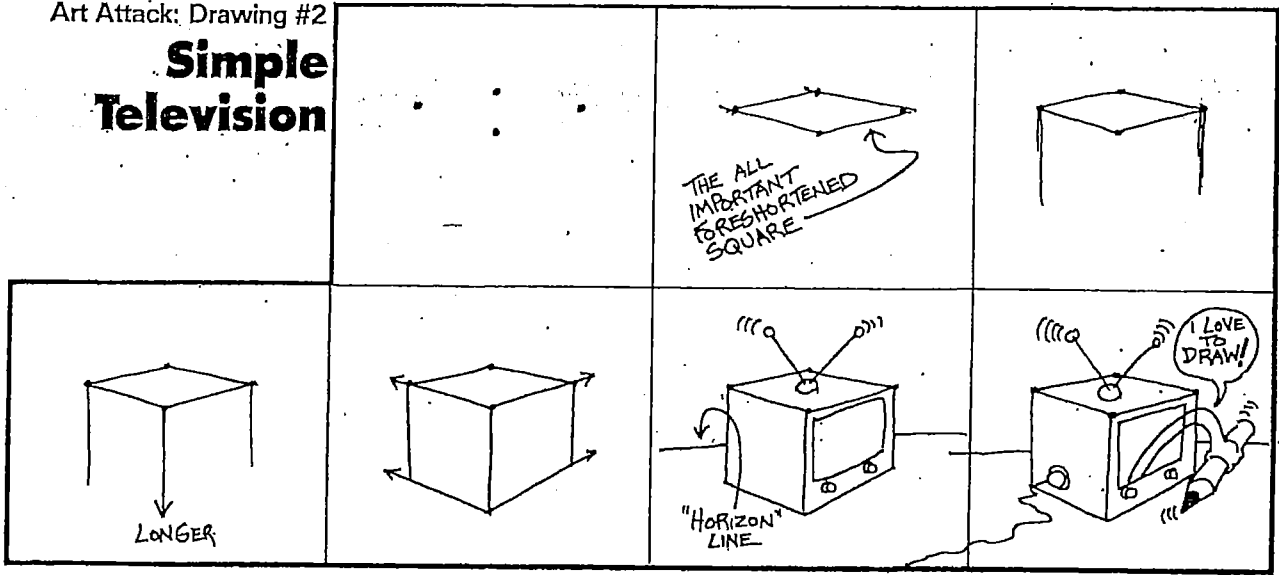
Art Attack: Drawing #1

Happy Birthday Cake



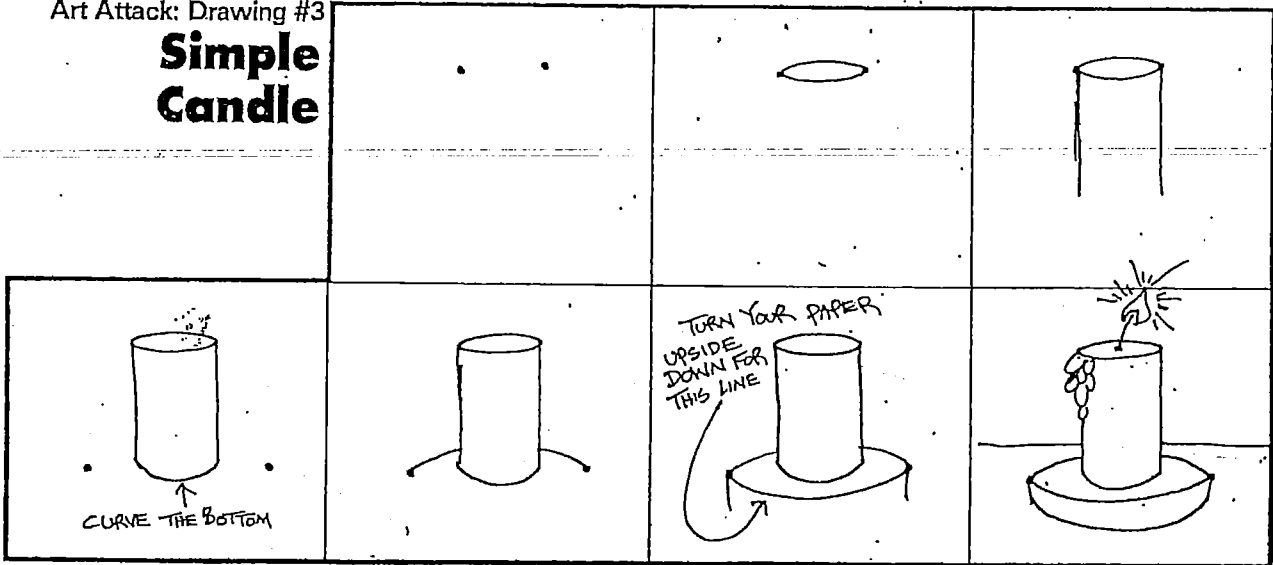
Art Attack: Drawing #2

Simple Television



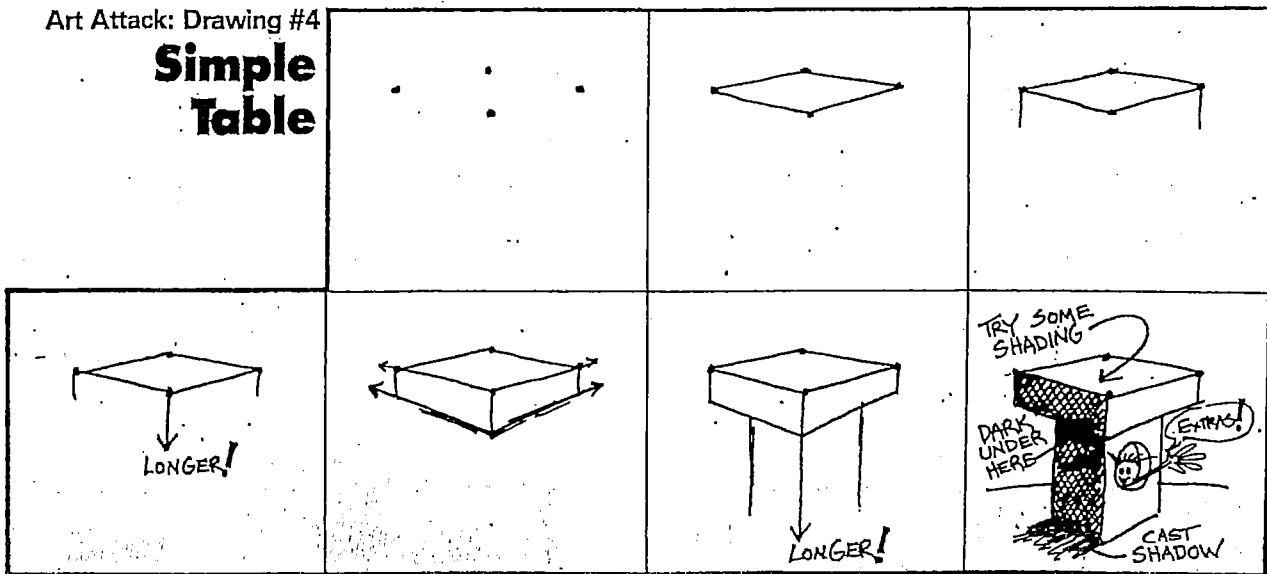
Art Attack: Drawing #3

Simple Candle



Art Attack: Drawing #4

Simple Table




Name: _____

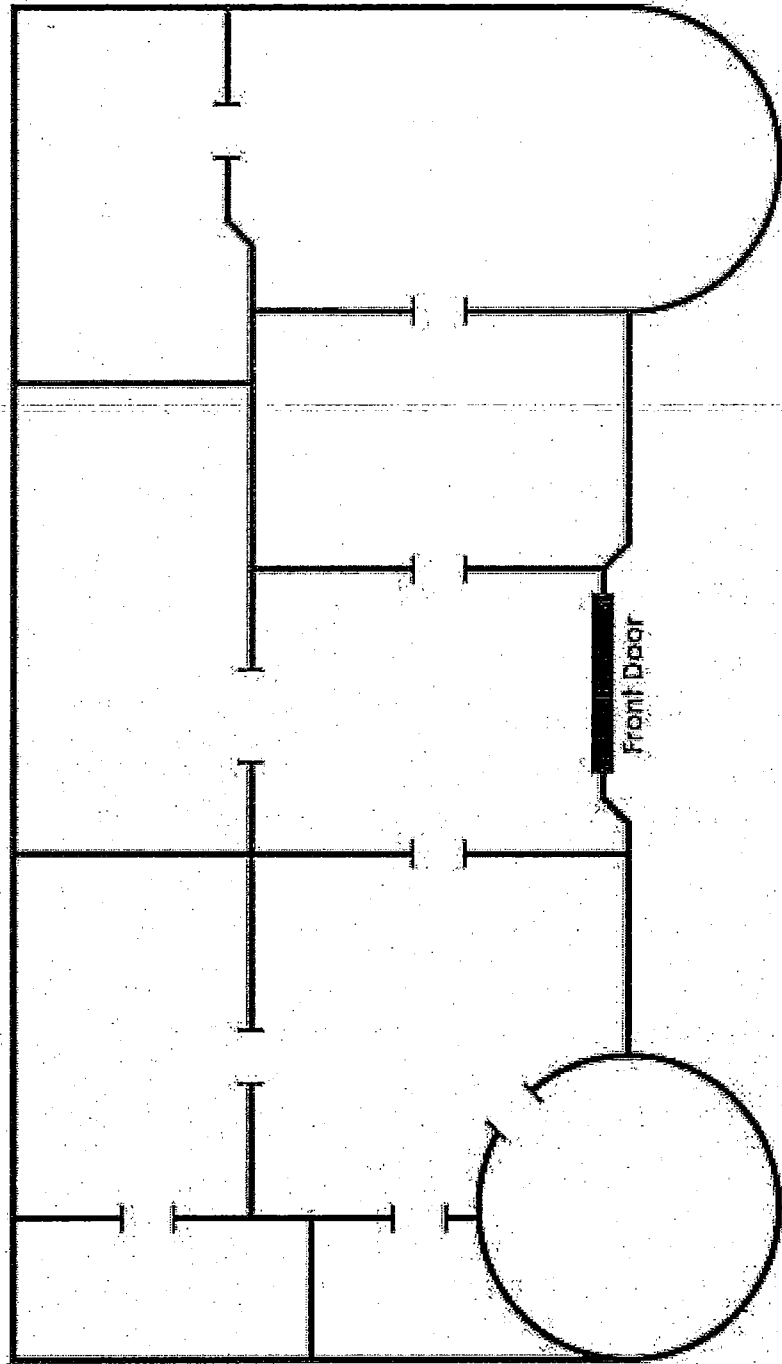
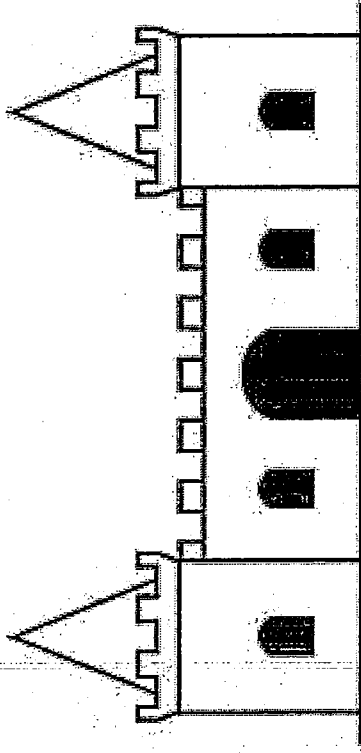
Royal Castle Floor Plan

Write your name at the top of the Royal Castle Floor Plan map and follow the directions below.

1. When you enter the castle through the front door, you are in the living room. Label this room LIVING ROOM and draw a sofa in it.
2. As you walk to the east from the living room, you enter the royal TV room. Label this room TV ROOM and draw a television in it.
3. The largest room in the castle is the Queen's bedroom. Label this room QUEEN'S BEDROOM and draw a bed in it.
4. Directly north of the Queen's bedroom is the queen's closet. Label this room QUEEN'S CLOSET and draw a dress in it.
5. Directly west of the Queen's closet is the library. Label this room LIBRARY and draw a book in it.
6. The smallest room in the castle is the bathroom. Label this room BATHROOM and draw a bathtub in it.
7. Directly east of the bathroom is the kitchen. Label this room KITCHEN and draw a stove and refrigerator.
8. The dining room is shaped like a circle. Label this room DINING ROOM and draw a table in it.
9. If you walk north from the kitchen, you enter the King's bedroom. Label this room KING'S BEDROOM and draw a bed in it.
10. If you're in the King's bedroom and look to the west, you'll see the King's closet. Label this room KING'S CLOSET and draw a shirt in it.
11. Outside the castle, just south of the front door, is a sidewalk. Draw the sidewalk leading up to the front door.
12. The King and Queen decide to build a secret room in their castle. They will hide their jewels in this room. It will be a small room that is directly east of the queen's bedroom. Draw the secret room and label it SECRET ROOM. Draw a crown in this room.



Royal Castle Floor Plan



Name _____ # _____

Score to Shoot

1. A rectangle has an area of 56 square inches. The width of one side is 7 inches. What is the length of the other side?

2. A square has an area of 25 square inches. One side is 5 inches. What is the length of the other side?

3. A rectangle has a perimeter of 34 feet. The width is 5 feet. What is the length?

$$\begin{array}{r} 9,832 \\ - 4,754 \\ \hline \end{array}$$

$$\begin{array}{r} 48,123 \\ - 42,256 \\ \hline \end{array}$$

$91 \div 4 = \underline{\hspace{2cm}}$

$46 \div 3 = \underline{\hspace{2cm}}$

$$\begin{array}{r} 49 \\ \times 57 \\ \hline \end{array}$$

$$\begin{array}{r} 39 \\ \times 31 \\ \hline \end{array}$$